





Find the mistakes that I have made.

Show the working out for the correct answer.


1.  $16 \div 2 =$




2.  $20 \div 2 =$



3.  $18 \div 3 =$



4. Sam has shared 12 sweets equally between his 4 friends.



Create your own question.

Cofia: Show your working out.