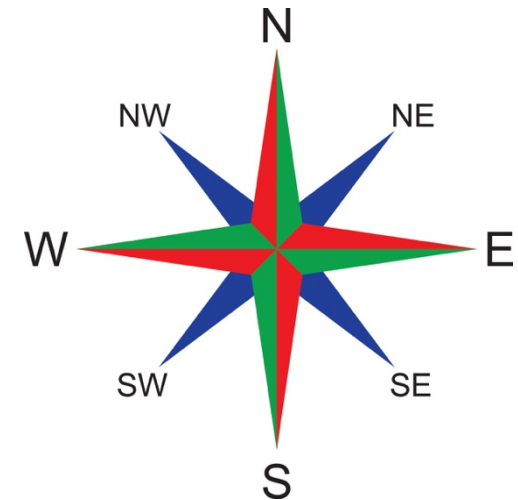






clockwise



anticlockwise



Quarter Turn

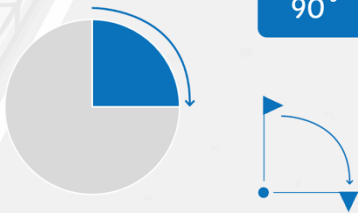
A quarter turn or rotation of one right angle.

One right angle = **90 degrees**

1 right angle

90°

quarter-turn
clockwise



Half Turn

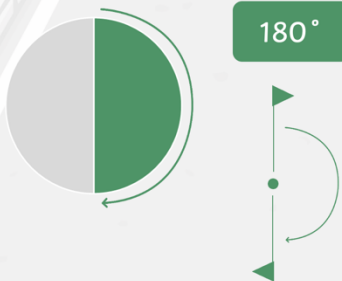
A half turn or rotation of two right angles.

Two right angles = **180 degrees**

2 right angles

180°

half-turn
clockwise



Key words



QUESTIONS I CAN
ASK MY PARTNER

How did you work out your answer?

Can you explain this to me?

Why did you choose that strategy?

Can you prove your answer is right?