
























		Staff room 			Canteen 	
Hall 		Pysgodyn 		Bottom playground 		
	Mrs Caswell's office 		Costume cupboard 			Y'r Ogof 
Office 		Cwtch 		Art room 		
	Field 		Pry Cop 		Marquee 	
Pengwin 		Printer room 				Mr Dowsett's 
Top playground 		Mrs Archard's 			Pili-Pala 	

1. What is on Top of the Top Play ground?.....
2. What is Left of Pry Cop?.....
3. What is Right of the Staff Room?.....
4. What is Below the Cwtch?.....
5. What is North of Pysgodyn?.....
6. What is South of Printer Room.....
7. What is East of Costume Cupboard.....
8. What is West of Pry Cop?.....

1. North 2 squares from Start is
2. East 2 squares from Start is ...
3. South 2 squares from Mrs Caswell's office is...
4. West 4 squares from Marquee is...
5. Go north 5 squares from Printer room is ...
6. Start at the Art room. How do you get to the Bottom playground?
7. Give directions from the staff room to the Office.

1. From the start, go north 4 squares. Where are you now?
2. Go north-east 1 square. Where are you now?
3. Go south 2 squares. Where are you now?
4. Go south-east 1 square. Where are you now?
5. Go west 4 squares. Where are you now?
6. Start at the Art room. How do you get to the Costume Cupboard?
7. Direct someone from Penguin to the Bottom playground.
8. Write directions from somewhere on the map to another place.

1. From the start, go north 4 squares and 3 squares east. Where are you now?
2. Go south-west 4 squares and west 2 squares. Where are you now?
3. Go north-east 2 squares and north 1 square. Where are you now?
4. Go north-west 1 square and north-east 1 square. Where are you now?
5. Go south-east 2 squares and south-west 2 squares. Where are you now?
6. Start at Mrs Archard's office. How do you get to the Y'r o gof?
7. Give directions from the Hall to Mr Dowsett.
8. Write directions from somewhere on the map to another place.

1. From the start, go north 4 squares and 3 squares east. Where are you now?
2. Go south-west 4 squares and west 2 squares. Where are you now?
3. Go north-east 2 squares and north 1 square. Where are you now?
4. Go north-west 1 square and north-east 1 square. Where are you now?
5. Go south-east 2 squares and south-west 2 squares. Where are you now?
6. Start at Mrs Archard's office. How do you get to the Y'r o gof?
7. Give directions from the Hall to Mr Dowsett.
8. Write directions from somewhere on the map to another place.

