


Divide by 5

1 Here are some counters.



a) Draw circles around groups of 5

b) Complete the sentences.

There are 30 counters.

There are counters in each group.

There are groups.

$$30 \div 5 = \boxed{}$$

$$\boxed{} \times 5 = 30$$

2 Share the sweets equally between the party bags.



Complete the sentences.

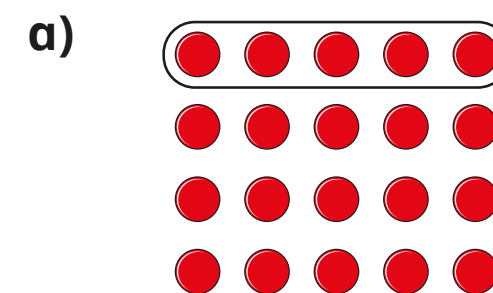
There are sweets.

There are party bags.

There are sweets in each bag.


$$15 \div \boxed{} = \boxed{}$$

3 Complete the number sentences for each array.



$$\boxed{} \times 5 = 20$$

$$20 \div 5 = \boxed{}$$

b)  $\square \times 5 = \square$
 $\square \div 5 = \square$

4 Draw an array to show that $10 \div 5 = 2$

5 A boat can hold 5 people.
How many boats are needed for 45 people?

Complete the division sentence.

$\square \div \square = \square$

6 Complete the divisions.

a) $15 \div 5 = \square$

b) $25 \div 5 = \square$

c) $50 \div 5 = \square$

d) $60 \div 5 = \square$


e) $\square \div 5 = 7$

f) $\square \div 5 = 11$

g) $\square \div 5 = 8$

h) $\square \div 5 = 0$

7 Kim buys 5 lollipops.



It costs 50p.

How much do 2 lollipops cost?

\square p