


Rounding - Green Chilli



Cofia:

5 or more, raise the score!

4 or below, let it go!


1. Ash caught 37 Pokémon during his journey. Round the number of Pokémon he caught to the nearest ten. How many Pokémon does Ash have when rounded?
2. Sarah has 28 marbles. She wants to find out how many marbles she has when rounding to the nearest 10. What number would she round to?
3. Tom counted his Pokémon cards. He has 53. If he rounds this number to the nearest 10, how many Pokémon cards does he have?
4. Llanrhidian has 96 CAPER books. If we want to round the number of books to the nearest 10, how many books would we say we have?
5. The Christmas show sold 167 tickets. If the number of tickets sold is rounded to the nearest 100, how many tickets would we say we sold for the show?
6. A farmer has 48 sheep. If he rounds this number to the nearest 10, how many sheep will he say he has?

7. The Disney store has 367 Lion King toys for sale. If the toys are rounded to the nearest hundred, how many toys will the shop say it has?

8. During a Pokémon battle, Pikachu scored 245 battle points. If the points are rounded to the nearest hundred for the battle report, how many points would it show?


9. Who is correct? Remember to explain why.

Linda says,



128 to the nearest ten is 130.


Charles says,



128 to the nearest ten is 120.


10. Who is correct? Remember to explain why.

Dustin says,



Nine hundred and eight-four to the nearest ten is nine hundred and eighty.

Ramaya says,



984 to the nearest ten is nine hundred and ninety.