

- 1** Max has this money.
He is given another 44p.
How much money does Max have now?



- 2** Sam has this money.
She spends 73p.
How much money does she have left?



- 3** Work out the calculations.

- a) $£1 - 30p$ c) $60p + 40p$
b) $£1 - 36p$ d) $60p + 50p$

- 4** Amir is partitioning amounts to work out the total of $£5.42$ and $£7.39$

$$£5 + £7 = £12$$

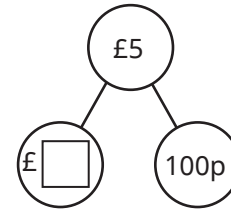
$$42p + 39p = 81p$$

$$£12 + 81p = £12.81$$

Use Amir's method to work out the totals.

- a) $£3.19 + £1.54$ c) $£22.92 + £8.05$
b) $£15.23 + £8.37$ d) $£10.02 + £1.09$

- 5** Complete the part-whole model and the workings to find $£5 - £2.52$



$$£4 - £2 = £ \boxed{}$$

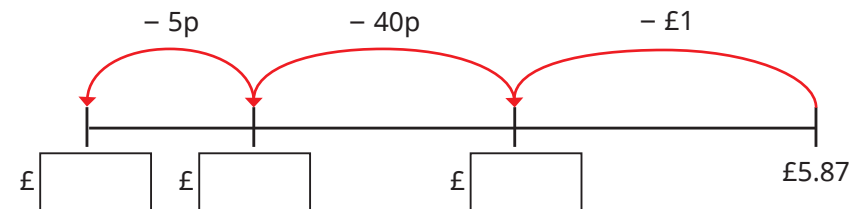
$$100p - 52p = \boxed{} p$$

$$£5 - £2.52 = £ \boxed{}$$

- 6** Work out the subtractions.

- a) $£4 - £2.75$ b) $£9 - £3.63$

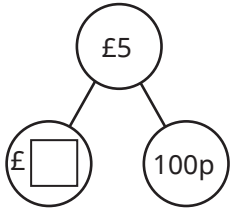
- 7** Complete the number line to work out $£5.87 - £1.45$



- 8** Work out the subtractions.

- a) $£4.96 - £2.75$ c) $£10.37 - £9.14$
b) $£9.85 - £3.65$ d) $£20.98 - £12.12$

- 5 Complete the part-whole model and the workings to find $£5 - £2.52$



$$£4 - £2 = £ \boxed{}$$

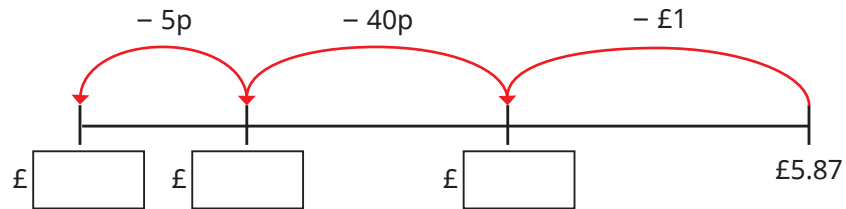
$$100\text{p} - 52\text{p} = \boxed{} \text{p}$$

$$£5 - £2.52 = £ \boxed{}$$

- 6 Work out the subtractions.

a) $£4 - £2.75$ b) $£9 - £3.63$



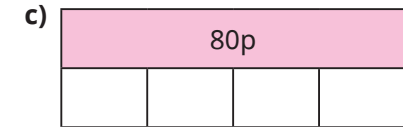
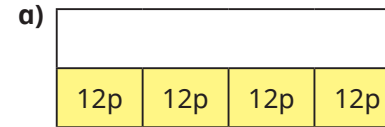
- 7 Complete the number line to work out $£5.87 - £1.45$



- 8 Work out the subtractions.

a) $£4.96 - £2.75$ c) $£10.37 - £9.14$
 b) $£9.85 - £3.65$ d) $£20.98 - £12.12$

- 9 Complete the bar models.



- 10 Nijah is working out the total of $£2.70$ and $£3.52$

$$£2 + £3 = £5$$

$$70\text{p} + 52\text{p} = 122\text{p}$$

$$£2.70 + £3.52 = £5 \text{ and } 122\text{p}$$

How can Nijah improve her answer?

- 11



Dexter buys a T-shirt and a cap.

He pays with a $£20$ note.

- a) Estimate how much change Dexter will get.

Compare answers with a partner.

- b) Work out how much change Dexter will get.