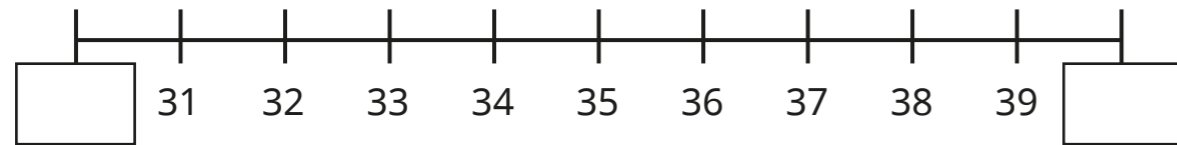


Round to the nearest 10

1 Here is a number line.



a) Which multiples of 10 do the numbers sit between?
Complete the number line.

b) Circle the number 37

Which multiple of 10 is 37 closest to?

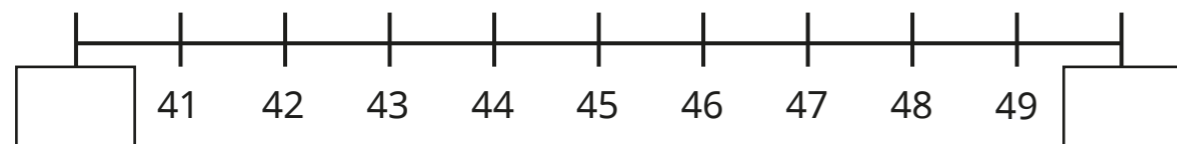
37 rounded to the nearest 10 is

c) Circle the number 34

Which multiple of 10 is 34 closest to?

34 rounded to the nearest 10 is

2 Here is a number line.

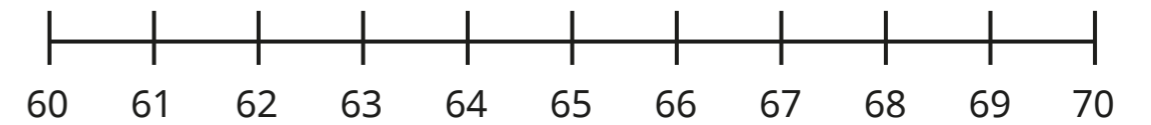


a) Complete the number line.

b) Which multiple of 10 is 41 closest to?

c) Which multiple of 10 is 46 closest to?

3 Use the number line to help you complete the sentences.



a) 62 is closer to than

62 rounded to the nearest 10 is

b) 68 is closer to than

68 rounded to the nearest 10 is

c) 65 is the same distance from as it is from

65 rounded to the nearest 10 is

4 Round each number to the nearest 10

You may use a number line to help you.

a) 39

d) 29

b) 42

e) 52

c) 64

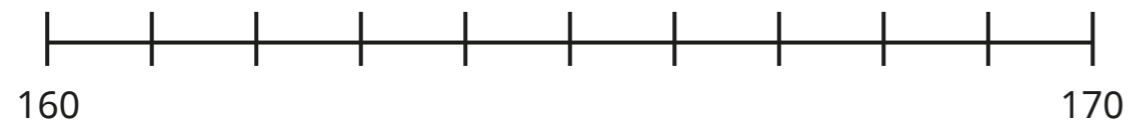
f) 84

5 Circle the numbers that round to 80 to the nearest 10

79 89 74 81 84 89 71 61



6 Here is a number line.



a) Complete the number line.

b) 163 is closer to than

163 rounded to the nearest 10 is

c) 167 is closer to than

167 rounded to the nearest 10 is

d) 165 is the same distance from as it

is from

165 rounded to the nearest 10 is

7 Circle the numbers that round to 120 to the nearest 10

125 122 118 115 114 126 120

8 A jumper costs £43

What is the cost of the jumper, rounded to the nearest £10?

£


9 Circle the numbers that round to 100 to the nearest 10

105 98 100 95 102 110 199

10 When rounded to the nearest 10, the length of a table is 180 cm.

What could the length of the table be?

11 Tiny is rounding numbers.



75 can round to 70 or 80 to the nearest 10

What mistake has Tiny made?
