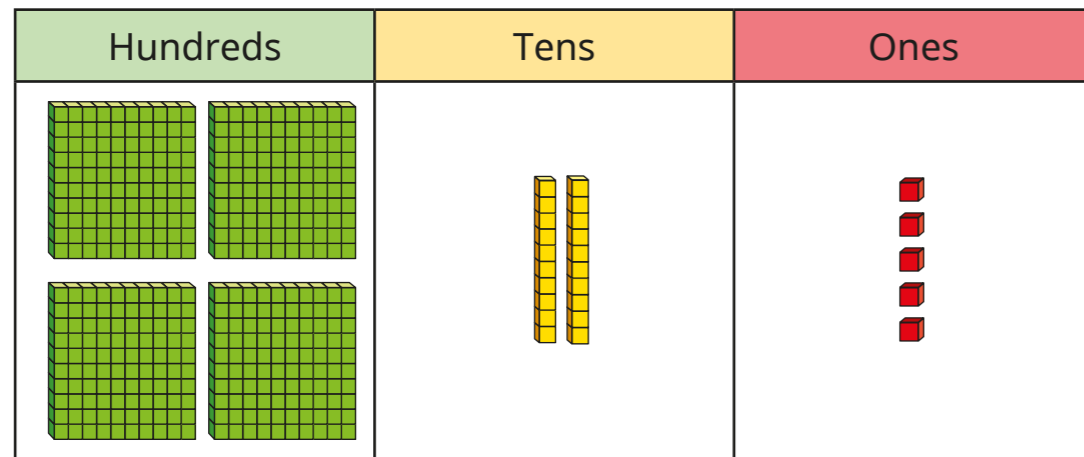


## Place value

Name: \_\_\_\_\_

- 1 Eva has made this number.



What number has Eva made?



1 mark

Is the number odd or even?

Circle your answer.

**odd**

**even**

Explain how you know.

1 mark

- 2 Circle the number that has the digit 7 in the tens column.

725

572

257

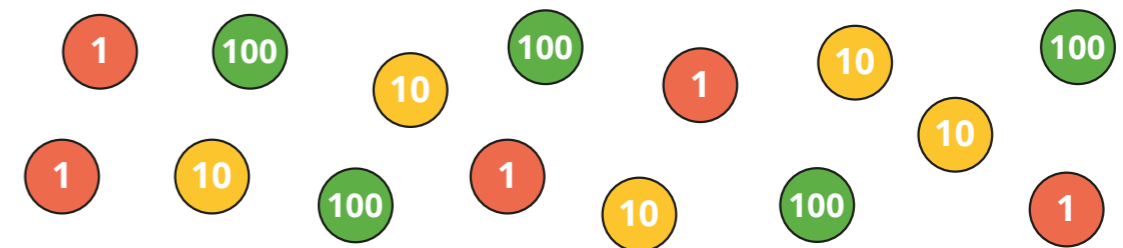
1 mark

- 3 Max is using counters to make a number.

He chooses 6 counters.

He makes a number greater than 300

Circle the counters that Max could have chosen.




1 mark

- 4 Match the words to the numerals.

six hundred and six

676

six hundred and sixty

606

six hundred and seventy-six

660

2 marks

5 Complete the number track.



2 marks

6 Here are some digit cards.



Kim uses the cards to make a 3-digit number.

Write all the numbers between 250 and 550 that Kim can make.

2 marks

7 What is 100 less than 719?

1 mark

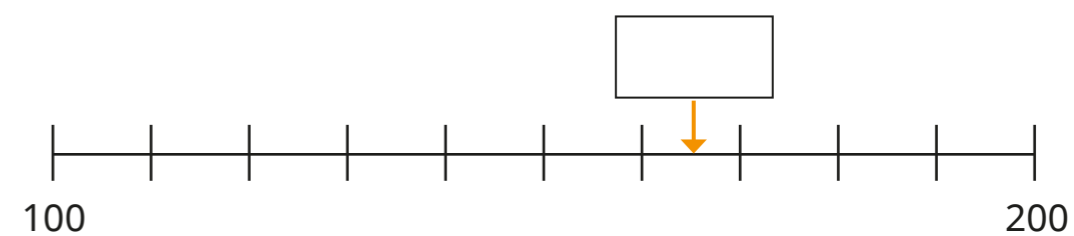
What is 10 more than 97?

1 mark

What is 10 less than 205?

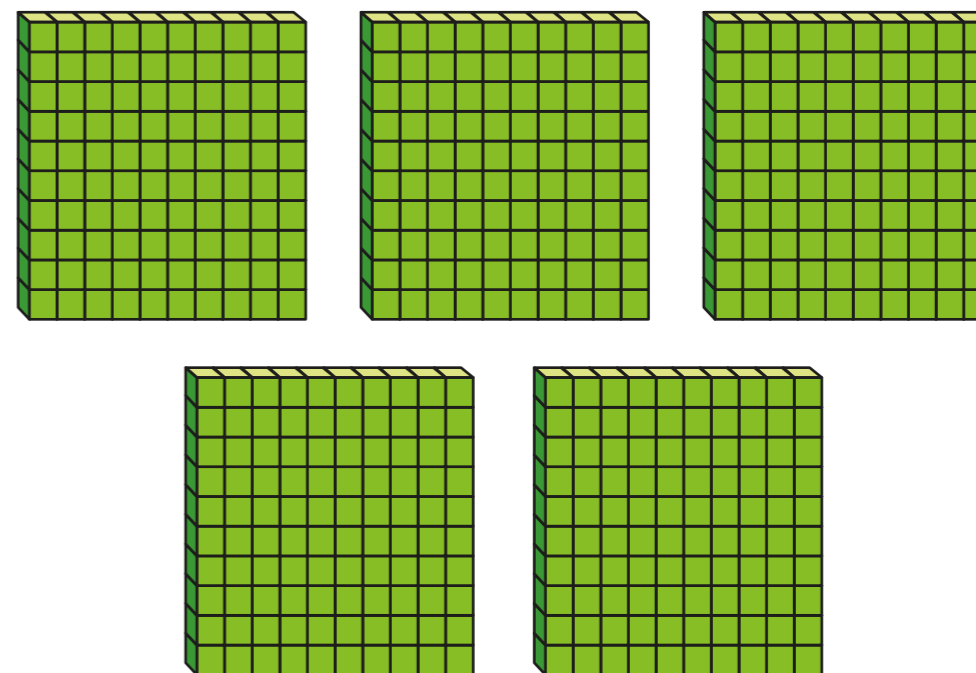
1 mark

8 What number is the arrow pointing to?



1 mark

9 How many tens are there in 500?



1 mark